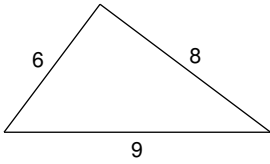


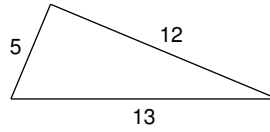
The Pythagorean Theorem

Do the following lengths form a right triangle?

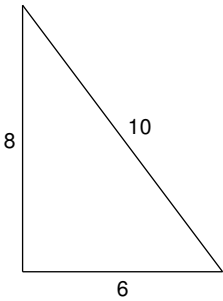
1)



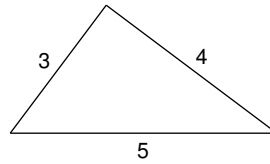
2)



3)

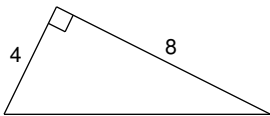


4)

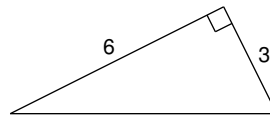
5) $a = 6.4$, $b = 12$, $c = 12.2$ 6) $a = 2.1$, $b = 7.2$, $c = 7.5$

Find each missing length to the nearest tenth.

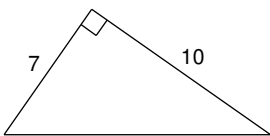
7)



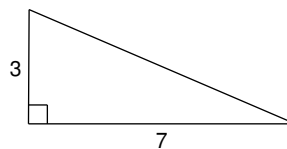
8)



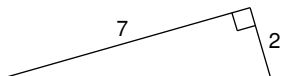
9)



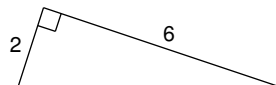
10)



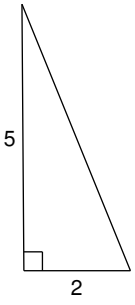
11)



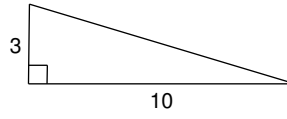
12)



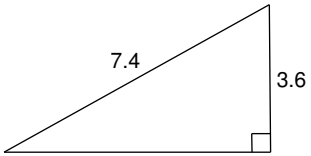
13)



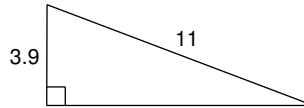
14)



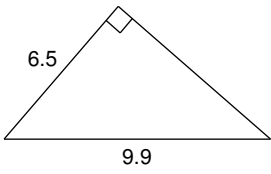
15)



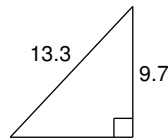
16)



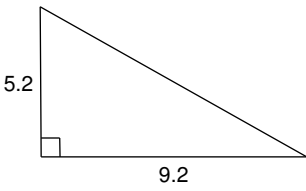
17)



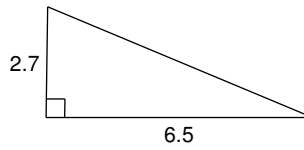
18)



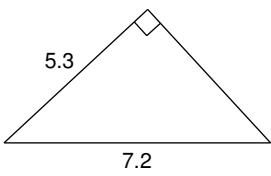
19)



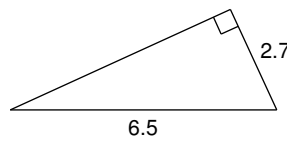
20)



21)



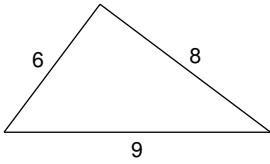
22)



The Pythagorean Theorem

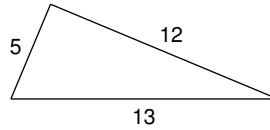
Do the following lengths form a right triangle?

1)



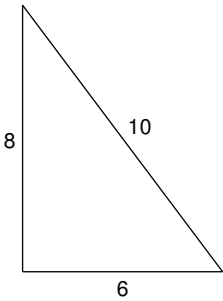
No

2)



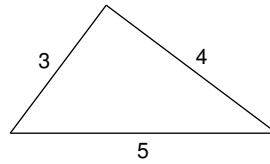
Yes

3)



Yes

4)



Yes

5) $a = 6.4$, $b = 12$, $c = 12.2$

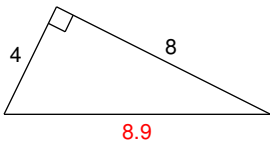
No

6) $a = 2.1$, $b = 7.2$, $c = 7.5$

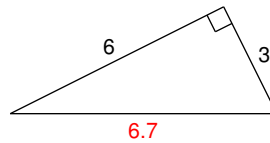
Yes

Find each missing length to the nearest tenth.

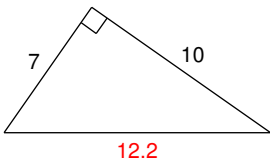
7)



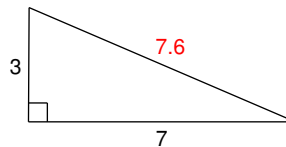
8)



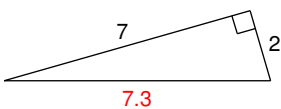
9)



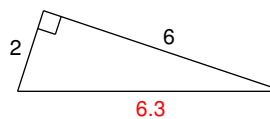
10)



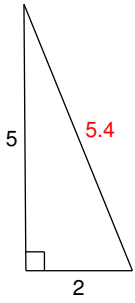
11)



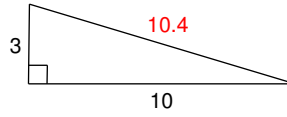
12)



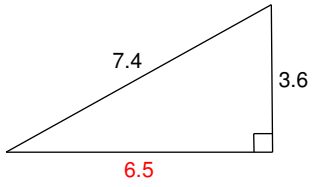
13)



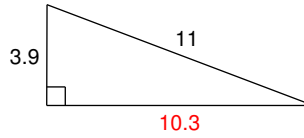
14)



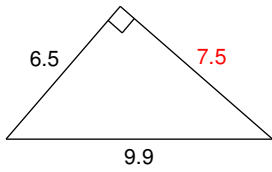
15)



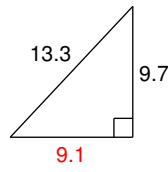
16)



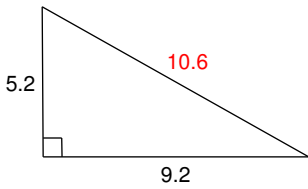
17)



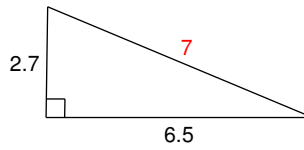
18)



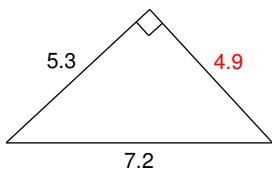
19)



20)



21)



22)

